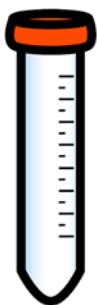


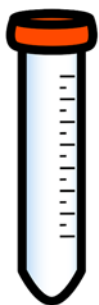
Name

My guess is:



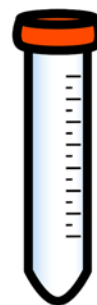
$$\bigcirc + \bigcirc = \bigcirc$$

My guess is:



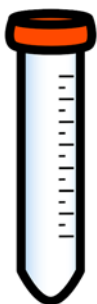
$$\bigcirc + \bigcirc = \bigcirc$$

My guess is:



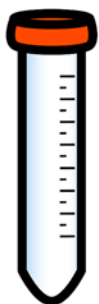
$$\bigcirc + \bigcirc = \bigcirc$$

My guess is:



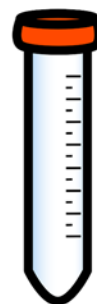
$$\bigcirc + \bigcirc = \bigcirc$$

My guess is:



$$\bigcirc + \bigcirc = \bigcirc$$

My guess is:



$$\bigcirc + \bigcirc = \bigcirc$$